

1ST
GRADE
EDITION

WEEKLY GRAPHS

for the whole year

Name: _____ Date: _____

HOW DO YOU GO HOME?

15			
14			
13			
12			
11			
10			
9			
8			
7			
6			
5			

How many friends are walking home?
.....


Draw a picture:


How are most friends going home?
.....

Name: _____ Date: _____

WHAT IS YOUR FAVORITE COLOR?

15			
14			
13			
12			
11			
10			
9			
8			
7			
6			
5			

How many friends voted for red and blue?
Draw a picture:


Write an equation:
 + =

Write the sum:
.....

What color had the most votes?
.....

CCSS ALIGNED

Sweet times
IN FIRST

CONTENTS

44 Student Graphs and 10 Pre-Filled Graphs where students can analyze the data!

1-2: Cover/Contents

3-5: Directions/Ways for Use

6: What's included?

7-8: Credits/Thank You/TOU

9: Year Long Cover

10-15: August Cover & Graphs

16-20: September Cover & Graphs

21-26: October Cover & Graphs

27-32: November Cover & Graphs

33-37: December Cover & Graphs

38-42: January Cover & Graphs

43-48: February Cover & Graphs

49-53: March Cover & Graphs

54-58: April Cover & Graphs

59-63: May Cover & Graphs

64-74: 10 Analyzing Data Graphs

STANDARDS:

1.OA.1

1.OA.2

1.OA.3

1.OA.5

1.OA.7

1.OA.8

1.NBT.2

1.NBT.4

1.NBT.5

1.MD.2

Students will
also use ALL
Mathematical
Practices!

DIRECTIONS

This pack is full of graphs!

The graphs are so versatile so you can use them however you want!

Something great about these graphs (besides reviewing important math standards) is that you will get to really know your students! The questions are high interest and are perfect for building your classroom community!

DIRECTIONS

I use these graphs as a weekly activity every Monday. I usually project the graph onto my whiteboard and we fill out the graph together as a class. I have my students write their "vote" onto a sticky note. Then, I call their names one-by-one and the class asks the graphing question to the student (What is your favorite ice cream flavor?)-perfect language skills practice. Once they answer, the class colors in their graph. At the end, we answer the questions together and record our answers.

WAYS FOR USE

Use one graph a week to introduce/review math skills.

Other ideas for use:

- single sheets as a weekly math warm-up any day of the week
- homework
- stapled/bound into a book and used weekly as a class (monthly booklets or year-long booklets).
- use them for small group instruction and /or reteaching a specific skill

WHAT'S INCLUDED?

44 Student
Graphs

FIRST GRADE GRAPHS



Year
long
cover

AUGUST TOPICS: graphs

- How do you feel?
- What is your favorite color?
- What is your favorite food?
- What is your favorite sport?

OCTOBER TOPICS: graphs

- What kind of candy do you like best?
- In what season is your birthday?
- Do you like dressing up?
- Will you go trick or treating?
- How many letters are in your last name?

SEPTEMBER TOPICS: graphs

- What is your favorite fruit?
- What do you do with your family?
- How many letters are in your name?
- How many people are in your family?



Monthly Covers

Name: _____ Date: _____

HOW DO YOU GO HOME?

How many Friends are walking home?

5				
H				
B				
12				
11				
10				
9				
8				

Draw a picture: _____

Name: _____ Date: _____

WHAT IS YOUR FAVORITE SPORT?

How many Friends like soccer?

5				
H				
B				
12				
11				
10				

Draw a picture: _____

Name: _____ Date: _____

WHAT IS YOUR FAVORITE BREAKFAST FOOD?

How many Friends like cereal and pancakes?

5				
H				
B				
12				
11				
10				
9				
8				

Write an equation: $\square + \square = \square$

Write the sum: _____

Name: _____ Date: _____

WHAT IS YOUR FAVORITE COLOR?

How many Friends voted for red and blue?

5				
H				
B				
12				
11				
10				
9				
8				
7				
6				
5				
4				
3				
2				
1				

Write an equation: $\square + \square = \square$

Write the sum: _____

What color had the most votes? _____

What is your Favorite color? _____

Name: _____ Date: _____

HOW DO YOU LIKE TO SPEND TIME WITH YOUR FAMILY?

What do most people like to do?

5				
H				
B				
12				
11				
10				
9				
8				
7				
6				
5				
4				
3				
2				
1				

How do you know? _____

How many fewer Friends like to play games than read? _____

How did you solve it? _____

10 Filled in
graphs
where
students
analyze the
date

Thank you!!

Thank you so much for your purchase! I hope this resource is just as helpful in your classroom as it's been in mine!

Love,
Sandra



♥ Hey there!

Terms of use

- This resource is licensed for single classroom use only. Do not redistribute.
- Uploading this resource to the internet is prohibited.
- Feel free to share about this resource on social media, but please link it back to my TeachersPayTeachers store.

credits



WEEKLY

graphs

This pack is perfect for your first grade classroom. There is a variety of standards that are hit in EVERY graph! Let me know if you have any questions or comments!

You can email me at
sweettimesinfirst@gmail.com

check it out

Did you LOVE this packet? Check these out...



All new items
posted are
half off for the
first 48 hours!

Follow me

Scan the QR Codes to follow me!



Sweet times
IN FIRST



FIRST GRADE GRAPHS




Name: _____

AUGUST

graphs

TOPICS:

- How do you go home?
- What is your favorite sport?
- What is your favorite breakfast food?
- What is your favorite color?



Name: _____

Name: _____ Date: _____

HOW DO YOU GO HOME?

15				
14				
13				
12				
11				
10				
9				
8				
7				
6				
5				
4				
3				
2				
1				
	Car	Walk	Bus	After School Care



How many friends are walking home?

Draw a picture:

How are most friends going home?

Draw a picture:

How are you going home?

Name: _____ Date: _____

HOW DO YOU GO HOME?

15			
14			
13			
12			
11			
10			
9			
8			
7			
6			
5			
4			
3			
2			
1			
	Car	Walk	Bus



How many friends are walking home?

Draw a picture:

How are most friends going home?

Draw a picture:

How are you going home?

Name: _____ Date: _____

WHAT IS YOUR FAVORITE SPORT?

15			
14			
13			
12			
11			
10			
9			
8			
7			
6			
5			
4			
3			
2			
1			
	Soccer	Basket- ball	Base- ball


How many friends like soccer?

Draw a picture:



How are friends like basketball and baseball?

Draw a picture:



What is your favorite sport?

Name: _____ Date: _____

WHAT IS YOUR FAVORITE BREAKFAST FOOD?

15			
14			
13			
12			
11			
10			
9			
8			
7			
6			
5			
4			
3			
2			
1			
	Eggs	Cereal	Pancakes

How many friends like cereal and pancakes?
Draw a picture:

Write an equation:

+=

Write the sum:

What is the least favorite food?

What is the most favorite food?

What is your favorite?

Name: _____ Date: _____

WHAT IS YOUR FAVORITE COLOR?

15				
14				
13				
12				
11				
10				
9				
8				
7				
6				
5				
4				
3				
2				
1				
	blue	red	green	yellow

How many friends voted for red and blue?

Draw a picture:

Write an equation:

$$\square + \square = \square$$

Write the sum:

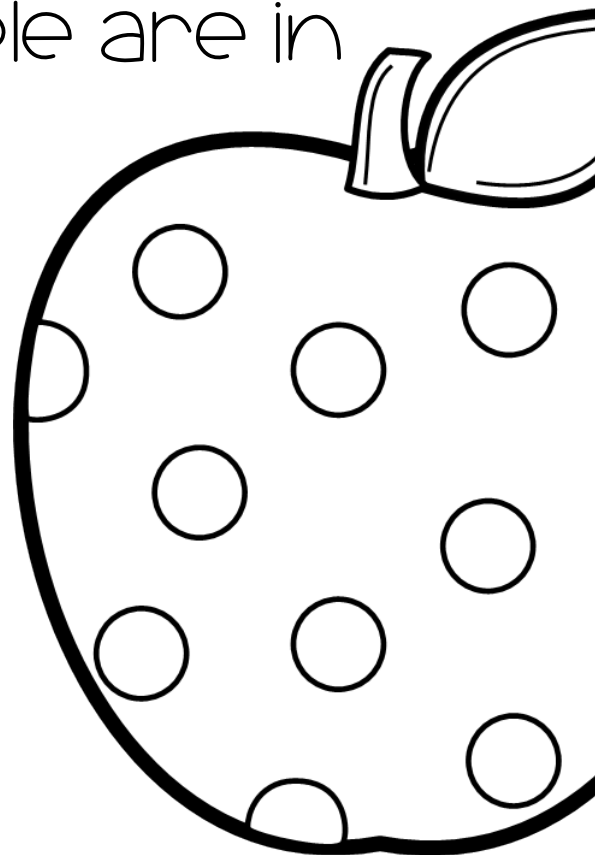
What color had the most votes?

What is your favorite color?

SEPTEMBER

TOPICS: graphs

- What is your favorite kind of apple?
- What do you prefer to draw with?
- How many letters are in your name?
- How many people are in your family?



Name: _____

Name: _____ Date: _____

WHAT IS YOUR FAVORITE KIND OF APPLE?

15			
14			
13			
12			
11			
10			
9			
8			
7			
6			
5			
4			
3			
2			
1			
	Red	Green	Yellow

How many friends like red apples?

Show how many in tallies:

--

How many friends like green and yellow apples?

Show how many in tallies:

--

Write an equation:

	+		=	
--	---	--	---	--

What is your favorite?

Name: _____ Date: _____

WHAT DO YOU PREFER TO DRAW WITH?

15			
14			
13			
12			
11			
10			
9			
8			
7			
6			
5			
4			
3			
2			
1			
	Pencil	Crayons	Markers

How many friends prefer to draw with crayons?

Write the number word:

.....

Draw a picture:

Is the number even or odd?

Fair Share!

Circle one:

EVEN

ODD

What do you prefer?

.....

Name: _____ Date: _____

HOW MANY LETTERS ARE IN YOUR NAME?

15			
14			
13			
12			
11			
10			
9			
8			
7			
6			
5			
4			
3			
2			
1			
	<5	6	7+

How many friends have fewer than 5 letters in their name?

How many friends have 7 or more letters in their name?

How many letters are in your name?

Is the number even or odd?

Fair Share!

Circle one:

EVEN

ODD

Name: _____ Date: _____

HOW MANY PEOPLE ARE IN YOUR FAMILY?

15			
14			
13			
12			
11			
10			
9			
8			
7			
6			
5			
4			
3			
2			
1			
	<3	4	5+

How many friends have 3 or fewer members in their family?

How many friends have 5 or more members in their family?

How many people are in your family?

Is the number even or odd?

Fair Share!

Circle one:

EVEN

ODD

OCTOBER

graphs

TOPICS:

- What kind of candy do you like best?
- In what season is your birthday?
- Do you like playing dress up?
- Will you go trick or treating?
- How many letters are in your last name?



Name: _____

Name: _____ Date: _____

WHAT KIND OF CANDY DO YOU LIKE BEST?

15			
14			
13			
12			
11			
10			
9			
8			
7			
6			
5			
4			
3			
2			
1			
	chocolate	sour	sweet

What is the most popular type of candy in our class?

Show how many with tallies:

How many friends like sweet and sour candies?

Write an equation:

$$\square + \square = \square$$

What is the sum?

What kind is your favorite?

Name: _____ Date: _____

IN WHAT SEASON IS YOUR BIRTHDAY IN?

15				
14				
13				
12				
11				
10				
9				
8				
7				
6				
5				
4				
3				
2				
1				
	fall	winter	spring	summer

How many friends have birthdays in the fall and winter?

Write an equation:

$$\square + \square = \square$$

What is the sum?

How many friends have birthdays in the spring and summer?

Write an equation:

$$\square + \square = \square$$

What is the sum?

In what season is your birthday in?

Name: _____ Date: _____

DO YOU LIKE PLAYING DRESS UP?

15			
14			
13			
12			
11			
10			
9			
8			
7			
6			
5			
4			
3			
2			
1			
	yes	no	maybe

How many friends like dressing up?

Is the number even or odd?

Fair Share!

Circle one:

EVEN

ODD

Do most friends like to dress up?

Do you like to dress up?

Name: _____ Date: _____

WILL YOU BE GOING TRICK OR TREATING?

30			
28			
26			
24			
22			
20			
18			
16			
14			
12			
10			
8			
6			
4			
2			
	yes	no	maybe

How many friends voted?

Write an equation:

$$\square + \square + \square = \square$$

What is the sum?

How many friends are going trick or treating?

How many friends are not going trick or treating?

Are you going trick or treating?

Name: _____ Date: _____

HOW MANY LETTERS ARE IN YOUR LAST NAME?

15			
14			
13			
12			
11			
10			
9			
8			
7			
6			
5			
4			
3			
2			
1			
	<5	6-7	8+

How many friends have last names with five or fewer letters?

How many friends have last names with 6 or 7 letters?

How many friends have last names with 8 or more letters?

How many letters are in your last name?

Is the number even or odd?

Circle one:


EVEN

ODD

NOVEMBER

TOPICS: graphs

- Do you like to eat turkey?
- How do you like to spend time with family?
- What is your favorite kind of pie?
- How many siblings do you have?
- What is your favorite recess activity?



Name: _____

Name: _____ Date: _____

DO YOU LIKE TO EAT TURKEY?

15			
14			
13			
12			
11			
10			
9			
8			
7			
6			
5			
4			
3			
2			
1			
	Yes	No	A little

How many friends like to eat turkey?

Show how many with tallies:

How many friends don't like to eat turkey?

Show how many with tallies:

Do you like turkey?

Name: _____ Date: _____

HOW DO YOU LIKE TO SPEND TIME WITH YOUR FAMILY?

15				
14				
13				
12				
11				
10				
9				
8				
7				
6				
5				
4				
3				
2				
1				
	park	games	read	T.V.

How many friends like to go to the park, play games, and read?

Write an equation:

$$\square + \square + \square = \square$$

What is the sum?

How many friends like to watch T.V. with their families?

How many tens and ones are in the number above?

T	O
<div style="border: 1px solid black; width: 60px; height: 60px; margin: 0 auto;"></div>	<div style="border: 1px solid black; width: 60px; height: 60px; margin: 0 auto;"></div>

Name: _____ Date: _____

WHAT IS YOUR FAVORITE KIND OF PIE?

15			
14			
13			
12			
11			
10			
9			
8			
7			
6			
5			
4			
3			
2			
1			
	Apple	Pumpkin	Cherry

What kind of pie do most of our friends like?

Show how many with tallies:

What kind of pie is the least favorite in our class?

Show how many with tallies:

Which is your favorite?

Name: _____ Date: _____

HOW MANY SIBLINGS DO YOU HAVE?

15			
14			
13			
12			
11			
10			
9			
8			
7			
6			
5			
4			
3			
2			
1			
	0	1	2+

How many friends don't have any siblings?

Show how many with tallies:

How many friends have siblings?

Show how many with tallies:

Do you have siblings?

Name: _____ Date: _____

WHAT IS YOUR FAVORITE RECESS ACTIVITY?

15			
14			
13			
12			
11			
10			
9			
8			
7			
6			
5			
4			
3			
2			
1			
	Jump Rope	Hula Hoop	Basket -ball

How many people like to play basketball?

Show how many with tallies:

How many friends like to jump rope and hula hoop?

Write an equation:


What is the sum?

What is your favorite activity?

DECEMBER

TOPICS: graphs

- What kind of candy cane do you like?
- What is your favorite food?
- What's your favorite fruit?
- Have you ever played with snow?



Name: _____

Name: _____ Date: _____

WHAT KIND OF CANDY CANES DO YOU LOVE?

15			
14			
13			
12			
11			
10			
9			
8			
7			
6			
5			
4			
3			
2			
1			
	minty	fruity	I don't like them

How many people like candy canes?

Write an equation:

What is the sum?

How many friends don't like candy canes?

Show how many with tallies:

Do you like candy canes?
If so, what kind?

Name: _____ Date: _____

WHAT'S YOUR FAVORITE FOOD?

15			
14			
13			
12			
11			
10			
9			
8			
7			
6			
5			
4			
3			
2			
1			
	Spaghetti	Hot Dog	Burger

How many friends like eating a food that has a bun?

Write an equation:

What is the sum?

How many friends voted for a favorite food?

Write an equation:

What is the sum?

What is your favorite?

Name: _____ Date: _____

WHAT'S YOUR FAVORITE FRUIT?

15			
14			
13			
12			
11			
10			
9			
8			
7			
6			
5			
4			
3			
2			
1			
	Strawberries	Apple	Banana

How many friends like apples and bananas?

Write an equation:

What are the 2 addends?

What is the sum?

What fruit is the most liked?

How many friends voted for the fruit with the most votes?

Name: _____ Date: _____

HAVE YOU EVER PLAYED WITH SNOW?

15			
14			
13			
12			
11			
10			
9			
8			
7			
6			
5			
4			
3			
2			
1			
	Yes, I liked it!	Yes, I didn't like it!	No

How many friends have played with snow?

Write an equation:

What are the 2 addends?

What is the sum?

How many tens and ones are in the number above?

T


O

What is 10 more than the number above?

JANUARY

TOPICS: graphs

- Did you travel during break?
- What is your favorite ice cream flavor?
- What are your favorite cookies?
- What do you like to drink during lunch?



Name: _____

Name: _____ Date: _____

DID YOU TRAVEL DURING THE BREAK?

15			
14			
13			
12			
11			
10			
9			
8			
7			
6			
5			
4			
3			
2			
1			
	Yes, by car!	Yes, by plane!	No

How many friends did not travel?

What is 10 more than the number above?

Write an equation:

What are the 2 addends?

What is the sum?

How many friends traveled?

Write an equation:

Name: _____ Date: _____

WHAT IS YOUR FAVORITE ICE CREAM FLAVOR?

15			
14			
13			
12			
11			
10			
9			
8			
7			
6			
5			
4			
3			
2			
1			
	Vanilla	Chocolate	Straw- -berry

How many people like vanilla ice cream?

How many people like chocolate and strawberry?

Write an equation:

What is the sum?

How many tens and ones are in the number above?

T	O
□	□

What is your favorite?

Name: _____ Date: _____

WHAT IS YOUR FAVORITE KIND OF COOKIE?

15			
14			
13			
12			
11			
10			
9			
8			
7			
6			
5			
4			
3			
2			
1			
	Sugar	Chocolate Chip	Peanut Butter

How many friends like chocolate chip cookies?

What is 10 more than the number above?

Write an equation:

How many people like peanut butter and sugar cookies?

Write an equation:

What is the sum?

How many tens and ones are in the number above?

T

O

Name: _____ Date: _____

WHAT DO YOU LIKE TO DRINK DURING LUNCH?

15			
14			
13			
12			
11			
10			
9			
8			
7			
6			
5			
4			
3			
2			
1			
	Milk	Chocolate Milk	Apple Juice

How many friends like to drink milk and apple juice?

Write an equation:

What is the sum?

What is 10 more than the number above?

Write an equation:

How many tens and ones are in the number above?

T


O

How many friends voted for the drink with the most votes?

FEBRUARY

TOPICS: graphs

- What do you love the most in school?
- What kind of sandwich do you like to eat?
- What lollipop flavor is your favorite?
- What vegetable do you like to eat?



Name: _____

Name: _____ Date: _____

WHAT DO YOU LOVE THE MOST AT SCHOOL?

15			
14			
13			
12			
11			
10			
9			
8			
7			
6			
5			
4			
3			
2			
1			
	Math	Reading	Writing

How many friends like reading and writing?

Write an equation:

What is the sum?

What is 10 more than the number above?

Write an equation:

How many tens and ones are in the number above?

T	O
<div style="border: 1px solid black; width: 40px; height: 40px; margin: 0 auto;"></div>	<div style="border: 1px solid black; width: 40px; height: 40px; margin: 0 auto;"></div>

What do you like most in school?

Name: _____ Date: _____

WHAT KIND OF SANDWICH DO YOU LIKE TO EAT?

15			
14			
13			
12			
11			
10			
9			
8			
7			
6			
5			
4			
3			
2			
1			
	Ham	PB & J	Grilled Cheese

How many friends like sandwiches?

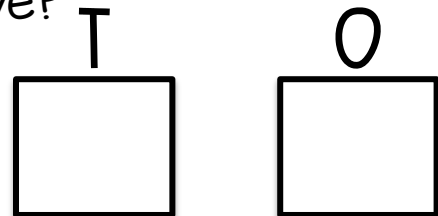
Write an equation:

What is the sum?

What is 10 less than the number above?

Write an equation:

How many tens and ones are in the number above?



How many friends voted for the sandwich with the most votes?

Name: _____ Date: _____

WHAT LOLLIPOP FLAVOR IS YOUR FAVORITE?

15			
14			
13			
12			
11			
10			
9			
8			
7			
6			
5			
4			
3			
2			
1			
	Cherry	Apple	Straw- berry

How many friends like cherry and apple?

Write an equation:

What is the sum?

Using the sum above, how many friends like cherry, apple, and strawberry?

Write an equation:

+=

What is the sum?

What is 10 less than the number above?

Write an equation:

Name: _____ Date: _____

WHAT VEGETABLE DO YOU LIKE TO EAT?

15			
14			
13			
12			
11			
10			
9			
8			
7			
6			
5			
4			
3			
2			
1			
	Potato	Carrot	Broccoli

How many friends like potatoes and carrots?

Write an equation:

What is the sum?

What is 10 more than the number above?

Write an equation:

How many tens and ones are in the number above?

T	O
<div style="border: 1px solid black; width: 40px; height: 40px; margin: 0 auto;"></div>	<div style="border: 1px solid black; width: 40px; height: 40px; margin: 0 auto;"></div>

What vegetable is your favorite?

Name: _____ Date: _____

WHAT IS YOUR FAVORITE SNACK?

15			
14			
13			
12			
11			
10			
9			
8			
7			
6			
5			
4			
3			
2			
1			
	Chips	Popcorn	Cookies

How many friends like snacks?

Write an equation:

What is the sum?

What is 10 less than the number above?

Write an equation:

How many tens and ones are in the number above?


T	O
<div style="border: 1px solid black; width: 40px; height: 40px; margin: 0 auto;"></div>	<div style="border: 1px solid black; width: 40px; height: 40px; margin: 0 auto;"></div>

What vegetable is your snack?

MARCH

TOPICS: graphs

- How would you like to travel?
- Where would you like to go?
- What is your favorite drink?
- What is your favorite playground activity?



Name: _____

Name: _____ Date: _____

WHAT IS YOUR FAVORITE PLAYGROUND ACTIVITY?

15			
14			
13			
12			
11			
10			
9			
8			
7			
6			
5			
4			
3			
2			
1			
	Monkey Bars	Slide	Swing

How many friends like the slide and swings?

Write an equation:

What is the sum?

What is 10 more than the number above?

Write an equation:

What is 10 less than the number above?

How many tens and ones are in the number above?

T

O

Name: _____ Date: _____

HOW WOULD YOU LIKE TO TRAVEL?

15			
14			
13			
12			
11			
10			
9			
8			
7			
6			
5			
4			
3			
2			
1			
	Plane	Boat	Train

How many friends would like to travel?

Write an equation:

What is the sum?

How many tens and ones are in the number above?

T	O
□	□

What is 10 more than the number above?

Write an equation:

How would you like to travel?

Name: _____ Date: _____

WHERE WOULD YOU LIKE TO GO?

15			
14			
13			
12			
11			
10			
9			
8			
7			
6			
5			
4			
3			
2			
1			
	Movies	Zoo	Museum

How many friends would like to go to the movies, museum, and zoo?

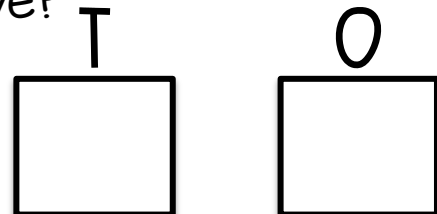
Write an equation:

What is the sum?

What is 10 less than the number above?

Write an equation:

How many tens and ones are in the number above?



Where would you like to go?

Name: _____ Date: _____

WHAT IS YOUR FAVORITE DRINK?

15			
14			
13			
12			
11			
10			
9			
8			
7			
6			
5			
4			
3			
2			
1			
	Hot Chocolate	Chocolate Milk	Apple Juice

How many friends like hot chocolate?

How many tens and ones are in the number above?

T	O
<input type="text"/>	<input type="text"/>

What is 10 more than the number above?

Write an equation:

What is the sum?

What is your favorite drink?

APRIL

graphs

TOPICS:

- What is your favorite art activity?
- What is your favorite farm animal?
- Who is your favorite president?
- What is your favorite BBQ food?



Name: _____

Name: _____ Date: _____

WHAT IS YOUR FAVORITE ART ACTIVITY?

15			
14			
13			
12			
11			
10			
9			
8			
7			
6			
5			
4			
3			
2			
1			
	Draw	Color	Paint

How many friends like art?

Write an equation:

What is the sum?

What is 10 less than the number above?

Write an equation:

What is 10 more than the number above?

Write an equation:

What is your favorite art activity?

Name: _____ Date: _____

WHAT IS YOUR FAVORITE FARM ANIMAL?

15			
14			
13			
12			
11			
10			
9			
8			
7			
6			
5			
4			
3			
2			
1			
	Chicken	Cow	Sheep

How many friends like chickens and cows?

Write an equation:

What is the sum?

Using the sum above, how many friends like chickens, cows, and sheep?

Write an equation:

+=

What is the sum?

What is 10 less than the number above?

Write an equation:

Name: _____ Date: _____

WHO IS YOUR FAVORITE PRESIDENT?

15			
14			
13			
12			
11			
10			
9			
8			
7			
6			
5			
4			
3			
2			
1			
	Washington	Jefferson	Lincoln

How many friends like President Lincoln?

What is 10 more than the number above?

Write an equation:

How many friends like President Washington and President Jefferson?

Write an equation:

+=

What is the sum?

Who is your favorite president?

Name: _____ Date: _____

WHAT IS YOUR FAVORITE BBQ FOOD?

15			
14			
13			
12			
11			
10			
9			
8			
7			
6			
5			
4			
3			
2			
1			
	Hamburger	Hot Dog	Salad

How many friends like hamburgers?

What is 10 more than the number above?

Write an equation:

What is the sum?

How many tens and ones are in the number above?

T	O
<div style="border: 1px solid black; width: 40px; height: 40px; margin: 0 auto;"></div>	<div style="border: 1px solid black; width: 40px; height: 40px; margin: 0 auto;"></div>

What is your favorite food?

MAY

graphs

TOPICS:

- What is your favorite ocean animal?
- What is your favorite summer activity?
- How do you feel about next year?
- What is your favorite summer drink?



Name: _____

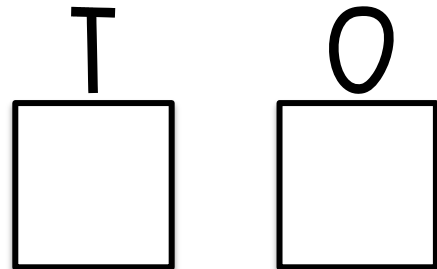
Name: _____ Date: _____

WHAT IS YOUR FAVORITE OCEAN ANIMAL?

15			
14			
13			
12			
11			
10			
9			
8			
7			
6			
5			
4			
3			
2			
1			
	Octopus	Shark	Fish

How many friends like animals with tentacles?

How many tens and ones are in the number above?



How many friends like sharks and fish?

Write an equation:

What is the sum?

What is your favorite ocean animal?

Name: _____ Date: _____

WHAT IS YOUR FAVORITE SUMMER ACTIVITY?

15			
14			
13			
12			
11			
10			
9			
8			
7			
6			
5			
4			
3			
2			
1			
	Swimming	Playing with friends	Park

How many friends voted?

How did you solve it?

What is 10 more than the number above?

How did you solve it?

Name: _____ Date: _____

HOW DO YOU FEEL ABOUT NEXT YEAR?

15			
14			
13			
12			
11			
10			
9			
8			
7			
6			
5			
4			
3			
2			
1			
	Excited	Happy	Sad

How do you feel about next year?

How many friends are happy and excited?

How did you solve it?

What is 10 more than the number above?

Write an equation:

Name: _____ Date: _____

WHAT IS YOUR FAVORITE SUMMER DRINK?

15			
14			
13			
12			
11			
10			
9			
8			
7			
6			
5			
4			
3			
2			
1			
	Lemonade	Ice Water	Juice

How many friends like lemonade?

What is 10 more than the number above?

How did you solve it?

How many friends like ice water and juice?

Write an equation:

BONUS

analyzing data

TOPICS:

- What is your favorite breakfast food?
- What do you prefer to draw with?
- In what season is your birthday in?
- How do you like to spend time with your family?
- What's your favorite fruit?
- Did you travel during break?
- What vegetable do you like to eat?
- What is your favorite drink?
- Who is your favorite president?
- What is your favorite ocean animal?

Name: _____

Name: _____ Date: _____

WHAT IS YOUR FAVORITE BREAKFAST FOOD?

15			
14			
13			
12			
11			
10			
9			
8			
7			
6			
5			
4			
3			
2			
1			
	Eggs	Cereal	Pancakes

How many friends like eggs and pancakes?

Write an equation:

$$\square + \square = \square$$

What is the least favorite food?

How many more people like pancakes than cereal?

How did you solve it?

Write an equation:

Name: _____ Date: _____

WHAT DO YOU PREFER TO DRAW WITH?

15			
14			
13			
12			
11			
10			
9			
8			
7			
6			
5			
4			
3			
2			
1			
	Pencil	Crayons	Markers

How many friends prefer to draw with crayons?

Write the number word:

.....

How many friends voted?

.....

Draw a picture:

How many more people like to use markers than crayons?

.....

How did you solve it?

Name: _____ Date: _____

IN WHAT SEASON IS YOUR BIRTHDAY IN?

15				
14				
13				
12				
11				
10				
9				
8				
7				
6				
5				
4				
3				
2				
1				
	fall	winter	spring	summer

How many friends have birthdays in the fall and winter?

Write an equation:

$$\square + \square = \square$$

In what seasons are there the same amount of birthdays?

How many more summer birthdays are there than winter birthday?

How did you solve it?

Name: _____ Date: _____

HOW DO YOU LIKE TO SPEND TIME WITH YOUR FAMILY?

15				
14				
13				
12				
11				
10				
9				
8				
7				
6				
5				
4				
3				
2				
1				
	park	games	read	T.V.

What do most people like to do?

How do you know?

How many fewer friends like to play games than read?

How did you solve it?

Name: _____ Date: _____

WHAT'S YOUR FAVORITE FRUIT?

15			
14			
13			
12			
11			
10			
9			
8			
7			
6			
5			
4			
3			
2			
1			
	Strawberries	Apple	Banana

How many friends voted?

Write an equation:

What are the 3 addends?

What is the sum?

What fruit is the least liked?

Is the number even or odd? Fair Share!

Circle one:

EVEN

ODD

Name: _____ Date: _____

DID YOU TRAVEL DURING THE BREAK?

15			
14			
13			
12			
11			
10			
9			
8			
7			
6			
5			
4			
3			
2			
1			
	Yes, by car!	Yes, by plane!	No

How many friends did not travel?

What is 10 more than the number above?

Write an equation:

What are the 2 addends?

What is the sum?

How many friends traveled?

Write an equation:

Name: _____ Date: _____

WHAT VEGETABLE DO YOU LIKE TO EAT?

15			
14			
13			
12			
11			
10			
9			
8			
7			
6			
5			
4			
3			
2			
1			
	Potato	Carrot	Broccoli

How many friends like potatoes and carrots?

Write an equation:

What is the sum?

What is 10 more than the number above?

Write an equation:

How many tens and ones are in the number above?

T

O

What is the most popular vegetable?

Name: _____ Date: _____

WHAT IS YOUR FAVORITE DRINK?

15			
14			
13			
12			
11			
10			
9			
8			
7			
6			
5			
4			
3			
2			
1			
	Hot Chocolate	Chocolate Milk	Apple Juice

How many friends like hot chocolate?

How many tens and ones are in the number above?

T	O
□	□

How many more friends like apple juice than chocolate milk

How did you solve it?

What is the least popular drink?

Name: _____ Date: _____

WHO IS YOUR FAVORITE PRESIDENT?

15			
14			
13			
12			
11			
10			
9			
8			
7			
6			
5			
4			
3			
2			
1			
	Washington	Jefferson	Lincoln

How many friends voted?

Write an equation:

How many friends like President Washington and President Jefferson?

Write an equation:

+=

What is 10 more than the number above?

Write an equation:

Who is the most favorite president?

Name: _____ Date: _____

WHAT IS YOUR FAVORITE OCEAN ANIMAL?

15			
14			
13			
12			
11			
10			
9			
8			
7			
6			
5			
4			
3			
2			
1			
	Octopus	Shark	Fish

How many friends voted?
Write an equation:

What is the sum?

How many more friends like octopuses than sharks?

How did you solve it?

How many tens and ones are in the number above?

T O

--	--